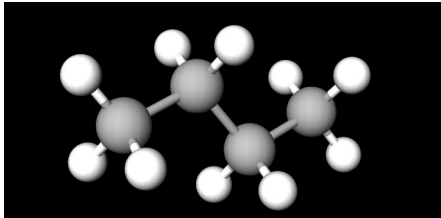
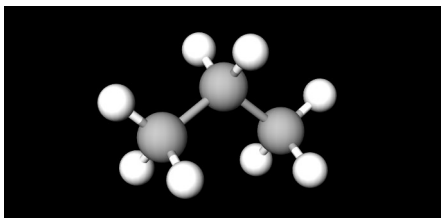
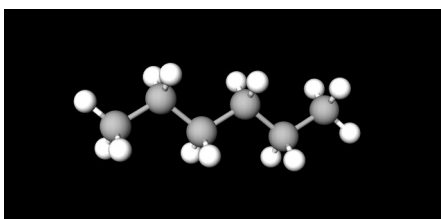
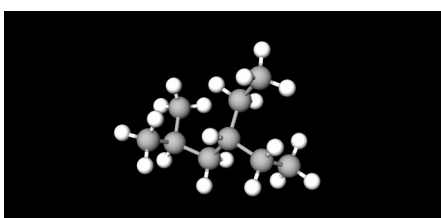
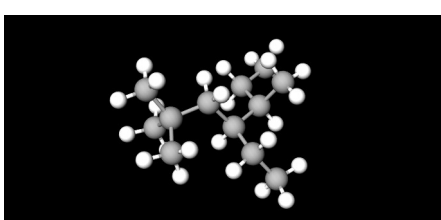


Problema 507: Dibuja las fórmulas semidesarrolladas de los siguientes modelos 3D:

<p>a)</p> 	$\text{CH}_3\text{-CH}_2\text{-CH}_2\text{-CH}_3$
<p>b)</p> 	$\text{CH}_3\text{-CH}_2\text{-CH}_3$
<p>c)</p> 	$\text{CH}_3\text{-CH}_2\text{-CH}_2\text{-CH}_2\text{-CH}_3$
<p>d)</p> 	$\begin{array}{ccccccc} \text{CH}_3 & \text{-CH-} & \text{CH}_2 & \text{-CH-} & \text{CH}_2 & \text{-CH}_3 & \\ & & & & & & \\ & \text{CH}_3 & & \text{CH}_2\text{-CH}_3 & & & \end{array}$
<p>e)</p> 	$\begin{array}{ccccccc} & \text{CH}_3 & & & \text{CH}_3 & & \\ & & & & & & \\ \text{CH}_3 & \text{-C-} & \text{CH}_2 & \text{-CH-} & \text{CH-} & \text{CH}_2 & \text{-CH}_3 \\ & & & & & & \\ & \text{CH}_3 & & \text{CH}_2\text{-CH}_3 & & & \end{array}$

f)

